

Telling the time to the minute

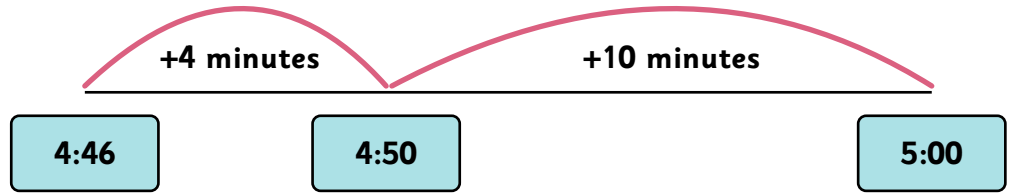
$$2+2=4$$

Fluency

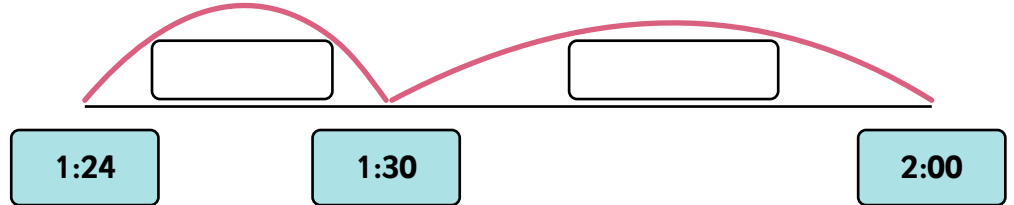


1) Complete the number lines below to show how many minutes there are until the next hour. An example one has been done for you.

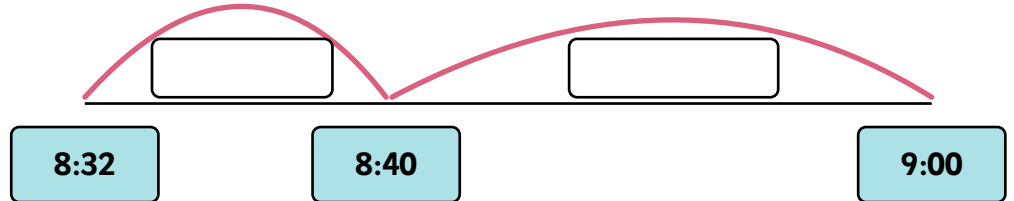
Example: How many minutes are there from 4:46 to 5:00? $10+4=14$ minutes



a) How many minutes are there from 1:24 to 2:00? _____



b) How many minutes are there from 8:32 to 9:00? _____



Telling the time to the minute

$$2+2=4$$

Fluency



2) Complete the questions below.

Remember you could draw your own number lines to help you.

a) How many minutes from 11:18 until 12:00? _____

b) How many minutes from 3:41 until 4:00? _____

c) How many minutes from 7:07 until 8:00? _____


Telling the time to the minute

$$2+2=4$$

Fluency




3) Circle the correct time for each clock.



12 minutes
past 4

12 minutes
past 5


20 minutes
past 2



10 minutes
to 12

11 minutes
to 11

11 minutes
to 12



27 minutes
past 9

27 minutes
to 10

33 minutes
to 10

Telling the time to the minute

$$2+2=4$$

Fluency



4) Draw on the minute hand to show the times below.



Eleven minutes
past seven.



16 minutes to five

Telling the time to the minute



Explanation



5)



Sophia

This clock is showing 14 minutes to 2.



Gabriel

This clock is showing 14 minutes to 1.

Who do you think is correct?

Sophia

Gabriel

Explain your answer.

Telling the time to the minute



Explanation



6) Which one of these times is the odd one out?

Tick the odd one out.

29 minutes past 8.



35 minutes to 9.

Explain why it is the odd one out.

Telling the time to the minute

$$2+2=4$$

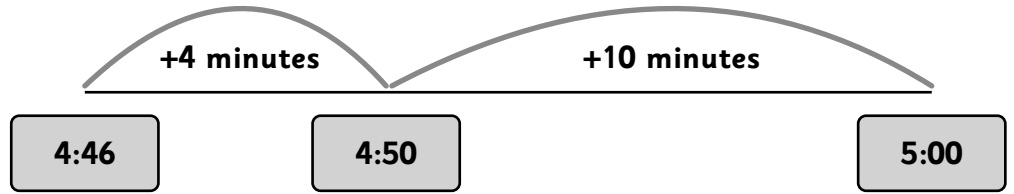
Fluency



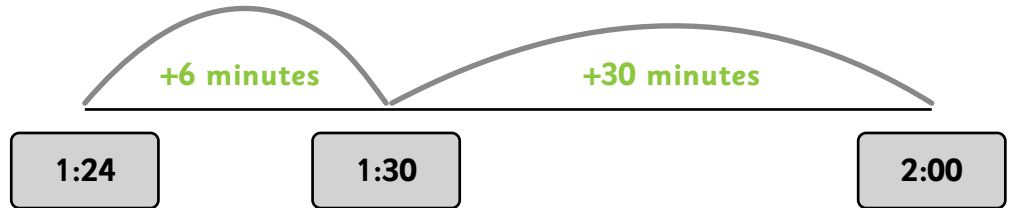
ANSWERS

1) Complete the number lines below to show how many minutes there are until the next hour. An example one has been done for you.

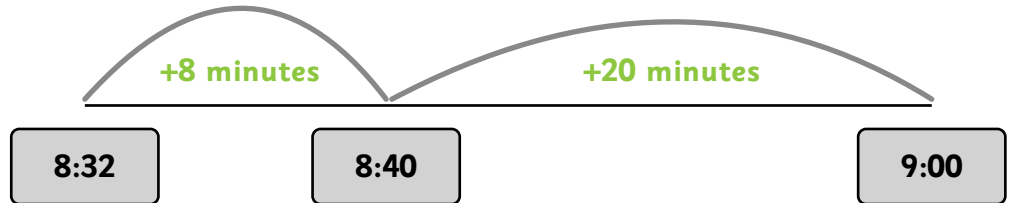
Example: How many minutes are there from 4:46 to 5:00? $10+4=14$ minutes



a) How many minutes are there from 1:24 to 2:00? 36 minutes



b) How many minutes are there from 8:32 to 9:00? 28 minutes



Telling the time to the minute

$$2+2=4$$

Fluency



ANSWERS

2) Complete the questions below.

Remember you could draw your own number lines to help you.

a) How many minutes from 11:18 until 12:00? 42 minutes

b) How many minutes from 3:41 until 4:00? 19 minutes

c) How many minutes from 7:07 until 8:00? 53 minutes

Telling the time to the minute


$$2+2=4$$

Fluency



ANSWERS


3) Circle the correct time for each clock.



12 minutes
past 4

12 minutes
past 5


20 minutes
past 2



10 minutes
to 12

11 minutes
to 11

11 minutes
to 12



27 minutes
past 9

27 minutes
to 10

33 minutes
to 10

Telling the time to the minute

$$2+2=4$$

Fluency



ANSWERS

4) Draw on the minute hand to show the times below.



Eleven minutes
past seven.



16 minutes to five

Telling the time to the minute



Explanation



ANSWERS

5)



Sophia

This clock is showing 14 minutes to 2.



Gabriel

This clock is showing 14 minutes to 1.

Who do you think is correct?

Sophia

Gabriel

Explain your answer.

The hour hand is between the 1 and 2 which means it cannot

be 14 minutes to 1.

Telling the time to the minute



Explanation



ANSWERS


6) Which one of these times is the odd one out?

Tick the odd one out.

29 minutes past 8.



35 minutes to 9.



Explain why it is the odd one out.

The other two times are showing 25 minutes past 8 or 35 minutes to 9.
